

PROJECT WORK
SESSION 2018 – 2019
CLASS – I I (TWO)

PROJECT WORK (SUBMISSION DATE: 2nd July, 2018)

ENGLISH LANGUAGE

(Total Marks : 20)

Question 1) Put these naming words in the right columns: [6]

school postman cow potato
London Ramesh hospital peacock
train girl chair spider

Person	Place	Animal	Thing

Question 2) Write the opposites: [4]

come- _____ cry- _____
hot- _____ black- _____
question- _____ in- _____
clever- _____ sit- _____

Question 3) Who and what am I? [4]

- (a) You come to me when you fall ill. _____
(b) I am a bird with a beautiful tail. _____
(c) You sweep a room with me. _____
(d) You switch me on to cool a room. _____

Question 4) Rewrite the following sentences, using capital letters, full stops and question marks where necessary: [4]

- (a) where is ram going
(b) raman lives in lucknow
(c) the capital of italy is rome
(d) bobo gave zonko a carrot and some bananas

Note : ½ marks for each : Index, Acknowledgement, Bibliography and neatness.

ENGLISH LITERATURE

(Total Marks : 20)

Question 1) Circle the correct spelling: [8]

- (a) TOMORROW TOMMOROW
(b) VEGITABLE VEGETABLE
(c) GIRRAFE GIRAFFE
(d) BISCUIT BISCUIT
(e) BRAKEFAST BREAKFAST
(f) BEAUTIFUL BEAUTYFUL
(g) POTATOE POTATO
(h) COFFEE COFEE

Question 2) Fill in the blanks with rhyming words: [4]

- (a) mad _____
(b) got _____
(c) clay _____
(d) night _____

Question 3) Fill in the blanks with the help of the words given in the box: [6]

wicked yellow greedy
smart sunny little

One bright and (1) _____ morning, (2) _____ chickens came out to play. A (3) _____ cat saw them. The (4) _____ cat ran after the (5) _____ chickens. But the chickens were (6) _____. They ran home and locked the door.

Question 4)

Note : ½ marks for each : Index, Acknowledgement, Bibliography and neatness.

HINDI LANGUAGE

(Total Marks : 20)

i zu 1½	vi us ifjokj dsfdl h l nL; dsckjs ea l kr okD; fyf[k, rFkk fp= Hkh fpi dkb, &	¼7½
i zu 2½	fuEufyf[kr "kCnkadsnk&nks i; k; okph "kCn fyf[k, rFkk fp= Hkh fpi dkb, &	¼4½
d&	iM+ [k& dey	
i zu 3½	uhpsfn, o.kk& ea ek=k,i yxkdj Qyka dsukeka dks i jk dfj, rFkk mudsfp= Hkh fpi dkb, &	¼4½
	x y c p e y l j t e [k x n	
i zu 4½	"kCnkads l gh Øe ea fy[kdj okD; cukb, &	¼3½
d&	vPNh gS ejh ek; cgq	
[k&	i k&nks dks nrk gS ek y h i kuh	
x&	gk&k gS l qj x ykc dk Qy	

Note : ½ marks for each : Index ¼0'k; I ph½ Acknowledgement ¼i kDdFku½ Bibliography ¼i anHkZ xFk I ph½and neatness ¼LOPNrk½

HINDI LITERATURE

(Total Marks : 20)

i zu 1½	vi uh i kB; i krd l s^l h[k&s uked dfork fyf[k, rFkk fp= Hkh fpi dkb, &	¼10½
i zu 2½	fuEufyf[kr "kCnkadsnr&kr "kCn fyf[k, &	¼4½
	dke] Hkxoku] egku] Mja	
i zu 3½	b ¾ f v& bL¾ h dh ek=k okysnk&nks "kCn fyf[k, rFkk fp= Hkh fpi dkb, &	¼4½
Note : ½ marks for each : Index ¼0'k; I ph½ Acknowledgement ¼i kDdFku½ Bibliography ¼i anHkZ xFk I ph½and neatness ¼LOPNrk½		

MATHEMATICS

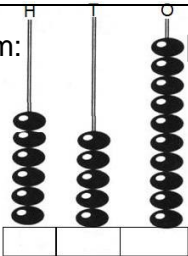
(Total Marks : 20)

Question 1) Read the spike abacus, write number, number name and its expanded form:

Number- _____

Number Name- _____

Expanded form- _____



[3]

Question 2) Use the symbol +, – or x to make the statements correct:

5 3 = 8

23 17 = 6

9 7 = 2

3 4 = 12

Question 3) Write the place value of each digit in the given number One has been done for you for example:

H

2

T

O

7

→ 7 ones = 7

→ 0 tens = 0

→ 2 hundreds = 200

H

5

T

O

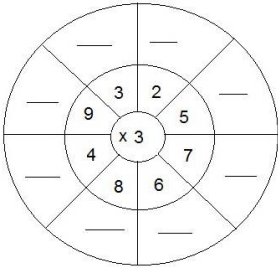
6

→ _____ = _____

→ _____ = _____

→ _____ = _____

Question 4) Complete the multiplication tables:

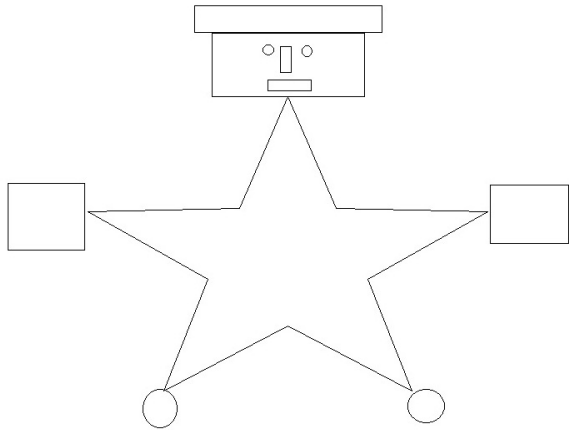


[4]

Question 5)

Count the number of horizontal, vertical and slanting lines and fill in the boxes.

[4]



Horizontal lines

Vertical lines

Slanting lines

Curved lines

Note : ½ marks for each : Index, Acknowledgement, neatness, Bibliography of the project assignment.

ENVIRONMENTAL STUDIES

(Total Marks : 20)

- Question 1)
- Draw a plant, colour it and label its parts.
- [5]
- Question 2)
- Write the name of any five people who help us in our daily lives and paste their pictures.
- [5]
- (a)
-
- (b)
-
- (c)
-
- (d)
-
- (e)
-
- Question 3)
- Write the name of any four type of houses and paste their pictures.
- [4]
- (a)
-
- (b)
-
- (c)
-
- (d)
-
- Question 4)
- Write the name of two slow vehicles and two very fast vehicles and paste their pictures also.
- [4]
- Slow Vehicles:
-
-
- Very Fast Vehicles:
-
-

Note : ½ marks for each : Index, Acknowledgement, Neatness, Bibliography


COMPUTER STUDIES


(Total Marks : 20)

Question 1)


Name these tools:


[6]





Eraser





A

- Question 2)
- Write any six activities which we can do on computer and paste their pictures.
- [6]
- (i)
-
- (ii)
-
- (iii)
-
- (iv)
-
- (v)
-
- (vi)
-
- Question 3)
- Paste or draw the picture of computer, its parts and label it.
- [6]

Note : ½ marks for each : Index, Acknowledgement, Neatness, Bibliography
